

The University of the State of New York  
REGENTS HIGH SCHOOL EXAMINATION

**PHYSICAL SETTING**  
**EARTH SCIENCE**

**Wednesday, January 28, 2009 — 9:15 a.m. to 12:15 p.m., only**

This is a test of your knowledge of Earth science. Use that knowledge to answer all questions in this examination. Some questions may require the use of the *Earth Science Reference Tables*. The *Earth Science Reference Tables* are supplied separately. Be certain you have a copy of the *2001 Edition (Revised November 2006)* of these reference tables before you begin the examination.

Your answer sheet for Part A and Part B–1 is the last page of this examination booklet. Turn to the last page and fold it along the perforations. Then, slowly and carefully, tear off your answer sheet and fill in the heading.

The answers to the questions in Part B–2 and Part C are to be written in your separate answer booklet. Be sure to fill in the heading on the front of your answer booklet.

You are to answer *all* questions in all parts of this examination according to the directions provided in the examination booklet. Record your answers to the Part A and Part B–1 multiple-choice questions on your separate answer sheet. Write your answers to the Part B–2 and Part C questions in your answer booklet. All work should be written in pen, except for graphs and drawings, which should be done in pencil. You may use scrap paper to work out the answers to the questions, but be sure to record all your answers on your separate answer sheet and in your answer booklet.

When you have completed the examination, you must sign the statement printed at the end of your separate answer sheet, indicating that you had no unlawful knowledge of the questions or answers prior to the examination and that you have neither given nor received assistance in answering any of the questions during the examination. Your answer sheet and answer booklet cannot be accepted if you fail to sign this declaration.

Notice. . .

A four-function or scientific calculator and a copy of the *2001 Earth Science Reference Tables (Revised November 2006)* must be available for you to use while taking this examination.

The use of any communications device is strictly prohibited when taking this examination. If you use any communications device, no matter how briefly, your examination will be invalidated and no score will be calculated for you.

**DO NOT OPEN THIS EXAMINATION BOOKLET UNTIL THE SIGNAL IS GIVEN.**

## Part A

### Answer all questions in this part.

*Directions (1–35):* For *each* statement or question, write on your separate answer sheet the *number* of the word or expression that, of those given, best completes the statement or answers the question. Some questions may require the use of the *Earth Science Reference Tables*.

1 Which statement describes the general relationship between the temperature and the luminosity of main sequence stars?

- (1) As temperature decreases, luminosity increases.
- (2) As temperature decreases, luminosity remains the same.
- (3) As temperature increases, luminosity increases.
- (4) As temperature increases, luminosity remains the same.

2 Which planet has the *least* distance between the two foci of its elliptical orbit?

- (1) Venus
- (2) Earth
- (3) Mars
- (4) Jupiter

3 Earth's rate of rotation is approximately

- (1) 1° per day
- (2) 15° per day
- (3) 180° per day
- (4) 360° per day

4 Light and other forms of electromagnetic radiation are given off by stars using energy released during

- (1) nuclear fusion
- (2) conduction
- (3) convection
- (4) radioactive decay

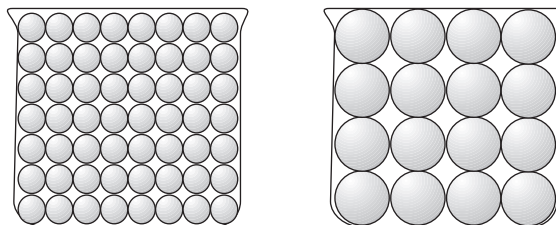
5 The path of a Foucault pendulum provides evidence that Earth

- (1) rotates on its axis
- (2) revolves in its orbit
- (3) is tilted on its axis
- (4) has an elliptical orbit

6 What time is it in Greenwich, England (at 0° longitude), when it is noon in Massena, New York?

- (1) 7 a.m.
- (2) noon
- (3) 5 p.m.
- (4) 10 p.m.

7 The diagram below shows two identical containers filled with uniform particles that were sorted by size.



Which characteristic is most likely the same for these particle-filled containers?

- (1) infiltration rate
- (2) water retention
- (3) capillarity
- (4) porosity

8 Which soil conditions normally result in the greatest amount of runoff?

- (1) low permeability and gentle slope
- (2) low permeability and steep slope
- (3) high permeability and gentle slope
- (4) high permeability and steep slope

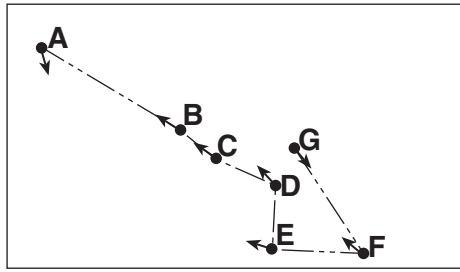
9 Very cold climates occur at Earth's North and South Poles because the polar regions

- (1) are usually farthest from the Sun
- (2) absorb the greatest amount of insolation
- (3) receive the most hours of daylight
- (4) receive low-angle insolation

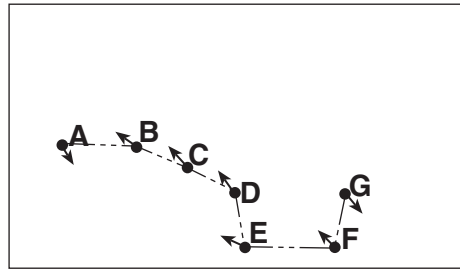
10 A barometric pressure of 1021.0 millibars is equal to how many inches of mercury?

- (1) 29.88
- (2) 30.15
- (3) 30.25
- (4) 30.50

11 The diagrams below show apparent changes in the positions of the stars in the Big Dipper that have occurred in the past 200,000 years. The directions of individual star movements as seen from Earth are shown by the arrows.

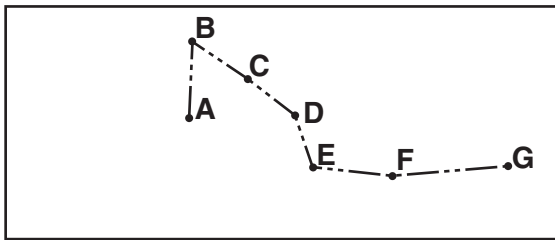


As it was 200,000 years ago

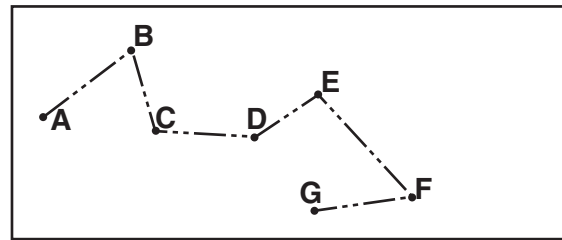


As it is today

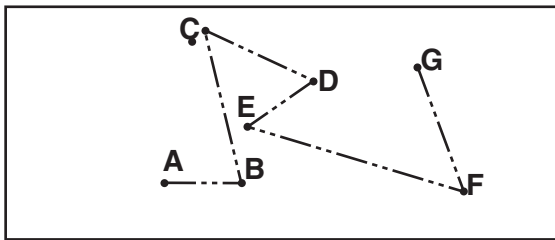
Which diagram best represents how the Big Dipper will appear when viewed from Earth in 200,000 years?



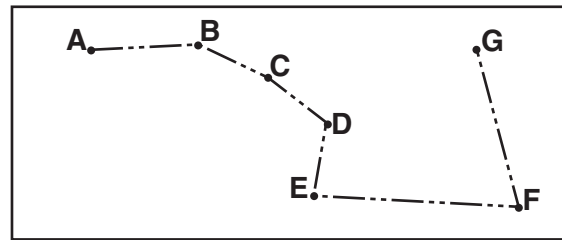
(1)



(3)

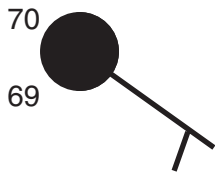


(2)

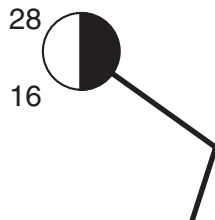


(4)

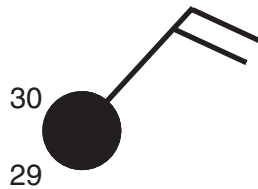
12 On which station model would the present weather symbol \* most likely be found?



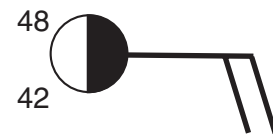
(1)



(2)

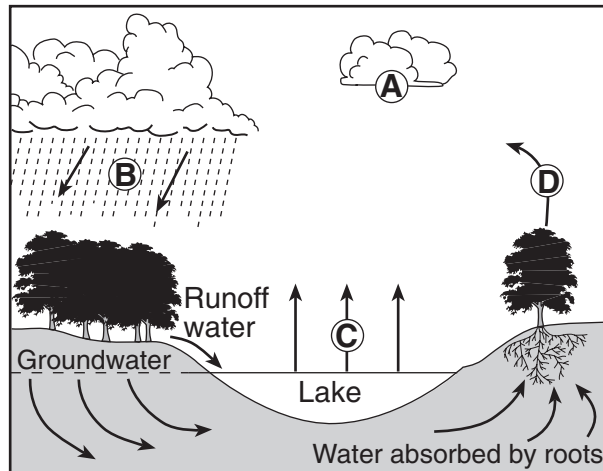


(3)



(4)

13 The letters *A* through *D* in the cross section below represent four of the processes that are part of the water cycle.



Which table correctly matches each letter with the process that it represents?

Letter	Process
A	condensation
B	precipitation
C	transpiration
D	evaporation

(1)

Letter	Process
A	transpiration
B	precipitation
C	evaporation
D	condensation

(3)

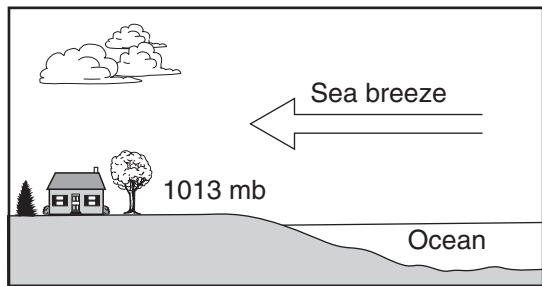
Letter	Process
A	evaporation
B	condensation
C	precipitation
D	transpiration

(2)

Letter	Process
A	condensation
B	precipitation
C	evaporation
D	transpiration

(4)

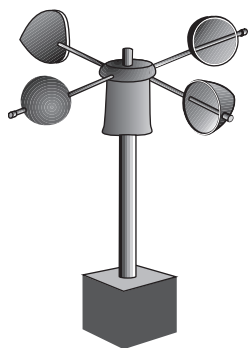
- 14 The cross section below shows a sea breeze blowing from the ocean toward the land. The air pressure at the land surface is 1013 millibars.



(Not drawn to scale)

The air pressure at the ocean surface a few miles from the shore is most likely

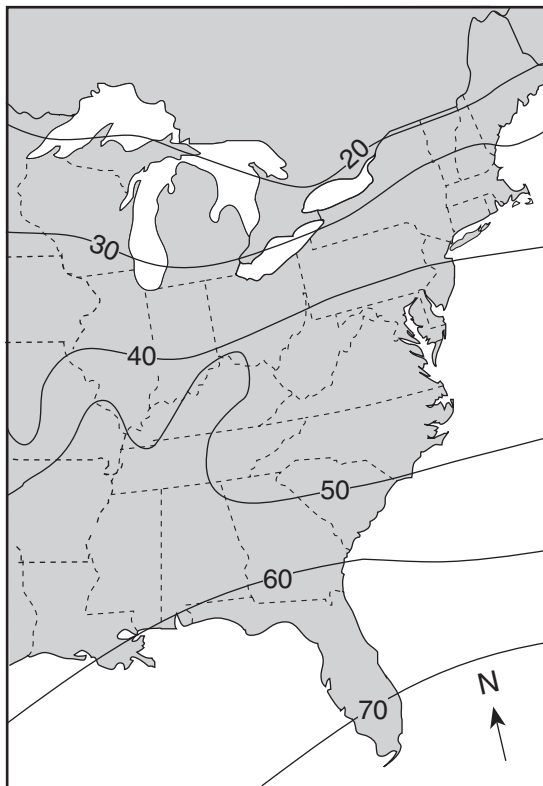
- (1) 994 mb                      (3) 1013 mb  
 (2) 1005 mb                    (4) 1017 mb
- 15 An instrument used to measure a weather variable is shown below.



Which weather variable is measured by this instrument?

- (1) wind direction              (3) wind speed  
 (2) air pressure                  (4) amount of rainfall
- 16 Mt. Marcy often has the coldest nighttime temperatures in New York State because of its
- (1) latitude and planetary winds  
 (2) latitude and elevation  
 (3) longitude and planetary winds  
 (4) longitude and elevation

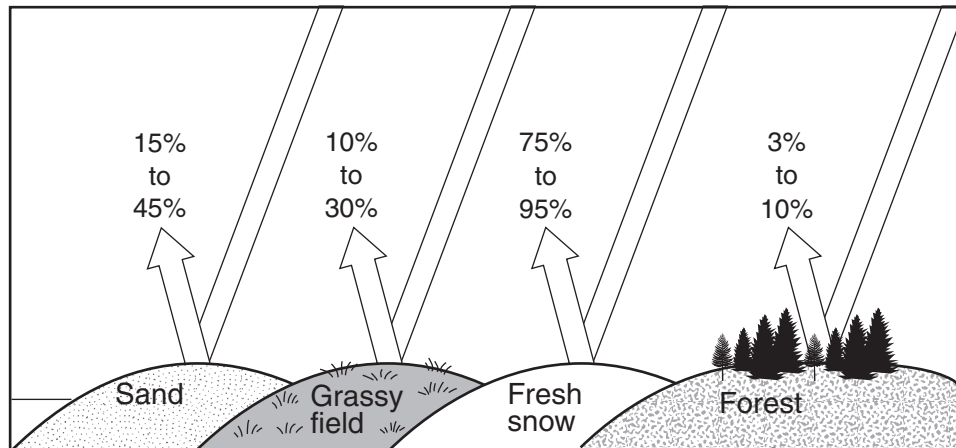
- 17 The map below shows a weather variable recorded at noon on a certain day. Isolines show values from 20 to 70.



Which atmospheric variable is most likely represented by the isolines on this map?

- (1) snowfall in inches  
 (2) wind speed in knots  
 (3) barometric pressure in millibars  
 (4) air temperature in degrees Fahrenheit
- 18 Which combination of temperature and pressure is inferred to occur within Earth's stiffer mantle?
- (1) 3500°C and 0.4 million atmospheres  
 (2) 3500°C and 2.0 million atmospheres  
 (3) 5500°C and 0.4 million atmospheres  
 (4) 5500°C and 2.0 million atmospheres

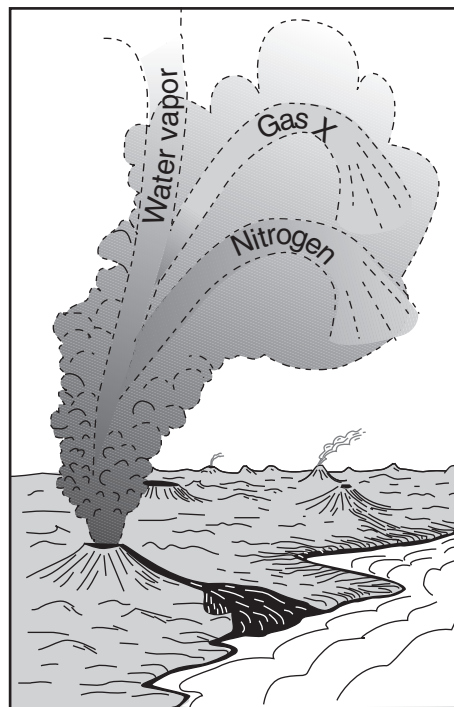
19 The diagram below indicates the amount of solar radiation that is reflected by equal areas of various materials on Earth's surface.



Which material absorbs the most solar radiation?

- (1) grassy field
- (2) fresh snow
- (3) sand
- (4) forest

20 The diagram below shows a process thought to have produced Earth's early atmosphere.

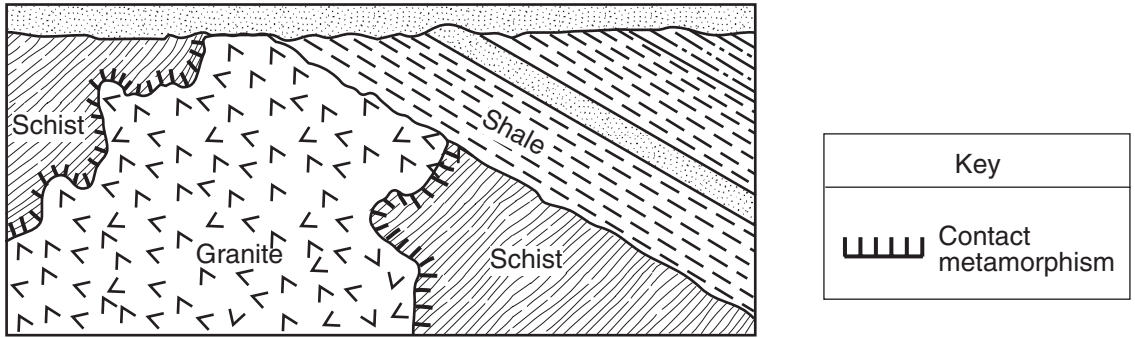


Which major component is shown as gas X?

- (1) helium
- (2) ozone
- (3) carbon dioxide
- (4) hydrogen

- 21 During which two geologic time periods did most of the surface bedrock of the Taconic Mountains form?
- (1) Cambrian and Ordovician
  - (2) Silurian and Devonian
  - (3) Pennsylvanian and Mississippian
  - (4) Triassic and Jurassic
- 22 Which event is an example of chemical weathering?
- (1) rocks falling off the face of a steep cliff
  - (2) feldspar in granite being crushed into clay-sized particles
  - (3) water freezing in cracks in a roadside outcrop
  - (4) acid rain reacting with limestone bedrock
- 23 The entire area drained by a river and its tributaries is called a
- (1) delta
  - (2) watershed
  - (3) valley
  - (4) floodplain
- 24 A meandering stream deposits most of its sediments on the
- (1) inside of meanders where the stream flows faster
  - (2) inside of meanders where the stream flows slower
  - (3) outside of meanders where the stream flows faster
  - (4) outside of meanders where the stream flows slower
- 25 Which natural agent of erosion is mainly responsible for the formation of the barrier islands along the southern coast of Long Island, New York?
- (1) mass movement
  - (2) running water
  - (3) prevailing winds
  - (4) ocean waves
- 26 Which geologic event occurred in New York State at approximately the same time that eurypterids were becoming extinct?
- (1) the opening of the Atlantic Ocean
  - (2) the uplift of the Appalachian Mountains
  - (3) the formation of the Catskill Delta
  - (4) the intrusion of the Palisades Sill
- 27 Which group of elements is listed in increasing order based on the percent by mass in Earth's crust?
- (1) aluminum, iron, calcium
  - (2) aluminum, silicon, magnesium
  - (3) magnesium, iron, aluminum
  - (4) magnesium, silicon, calcium
- 28 Which observation provides the best evidence that Earth revolves around the Sun?
- (1) The constellation Orion is only visible in the night sky for part of the year.
  - (2) The North Star, *Polaris*, is located above the North Pole for the entire year.
  - (3) The Sun appears to move across Earth's sky at a rate of 15°/hr.
  - (4) The Coriolis effect causes Northern Hemisphere winds to curve to the right.
- 29 One reason *Tetragraptus* is considered a good index fossil is that *Tetragraptus*
- (1) existed during a large part of the Paleozoic Era
  - (2) has no living relatives found on Earth today
  - (3) existed over a wide geographic area
  - (4) has been found in New York State
- 30 What is the dewpoint temperature when the relative humidity is 30% and the air temperature is 20°C?
- (1) -28°C
  - (2) 2°C
  - (3) 6°C
  - (4) 9°C
- 31 An igneous rock contains 10 grams of radioactive potassium-40 and a total of 10 grams of its decay products. During which geologic time interval was this rock most likely formed?
- (1) Middle Archean
  - (2) Late Archean
  - (3) Middle Proterozoic
  - (4) Late Proterozoic

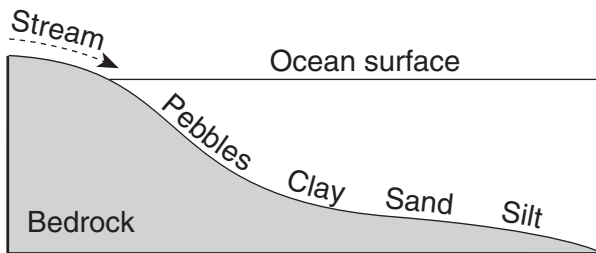
32 The geologic cross section below shows a complex structure containing a granite intrusion.



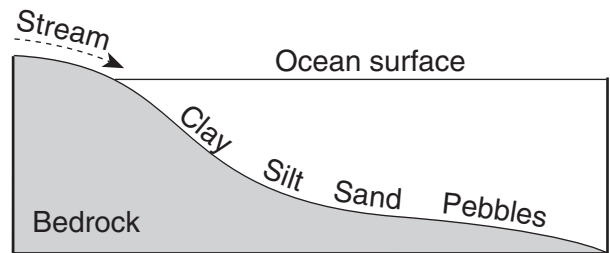
If the granite intrusion occurred 24 million years ago, what are the most probable ages of the schist and shale, in millions of years?

- (1) schist – 25; shale – 23
- (2) schist – 25; shale – 26
- (3) schist – 23; shale – 25
- (4) schist – 23; shale – 20

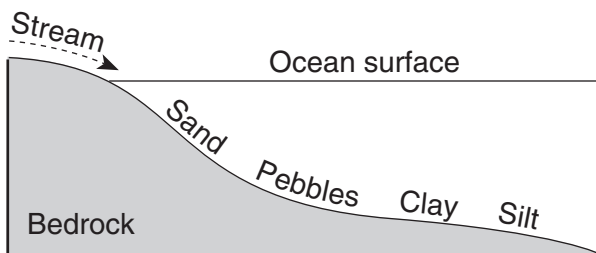
33 Which profile best shows the general depositional pattern that occurs when water from a stream enters the ocean?



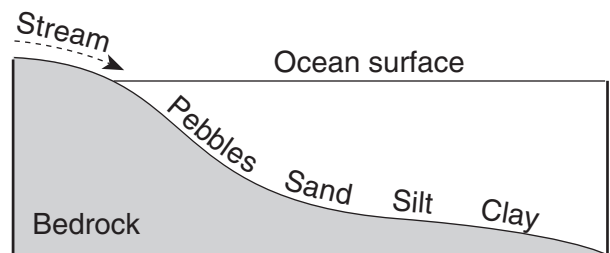
(1)



(3)



(2)



(4)



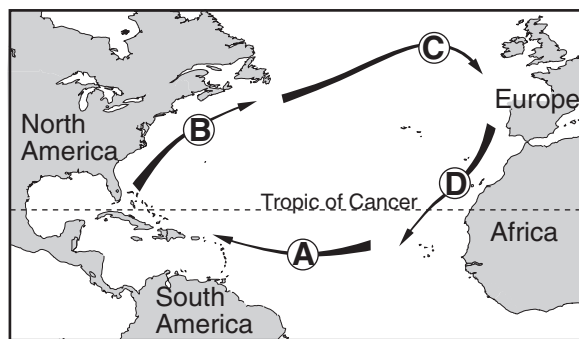
34 The map below shows the locations of Virginia Beach, Virginia, and Springfield, Missouri.



Virginia Beach experiences cooler summers and warmer winters than Springfield because Virginia Beach

- (1) is located closer to the Atlantic Ocean
- (2) is located closer to the equator
- (3) has a greater average yearly duration of insolation
- (4) has a greater average yearly intensity of insolation

- 35 The arrows labeled A through D on the map below show the general paths of abandoned boats that have floated across the Atlantic Ocean.

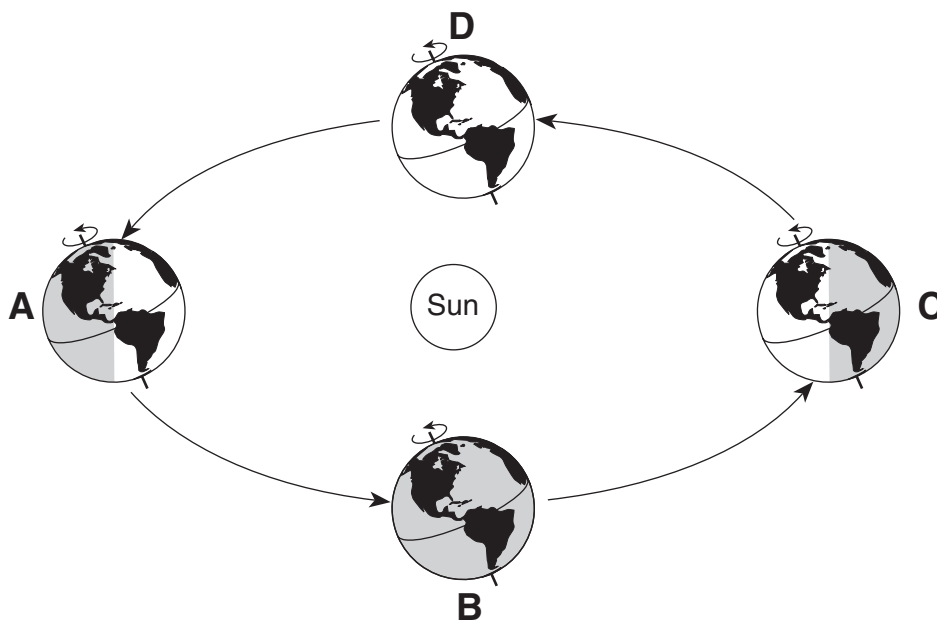


Which sequence of ocean currents was responsible for the movement of these boats?

- (1) South Equatorial → Gulf Stream → Labrador → Benguela
  - (2) South Equatorial → Australia → West Wind Drift → Peru
  - (3) North Equatorial → Kuroshio → North Pacific → California
  - (4) North Equatorial → Gulf Stream → North Atlantic → Canaries
-



Base your answers to questions 39 through 41 on the diagram below, which shows a model of Earth's orbit around the Sun. Letters A, B, C, and D represent Earth's position at the beginning of each season.

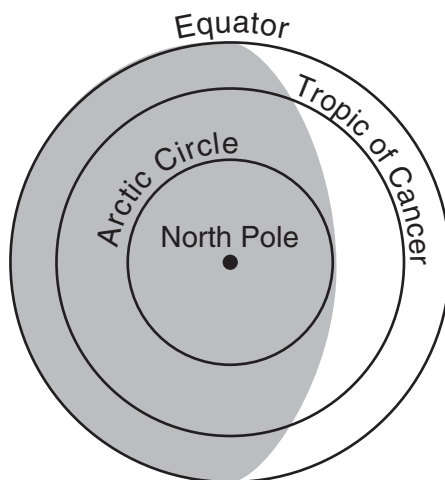


(Not drawn to scale)

39 Which position of Earth represents the first day of summer in the Northern Hemisphere?

- |       |       |
|-------|-------|
| (1) A | (3) C |
| (2) B | (4) D |

40 The diagram below shows how Earth is illuminated [lighted] by the Sun as viewed from above the North Pole.



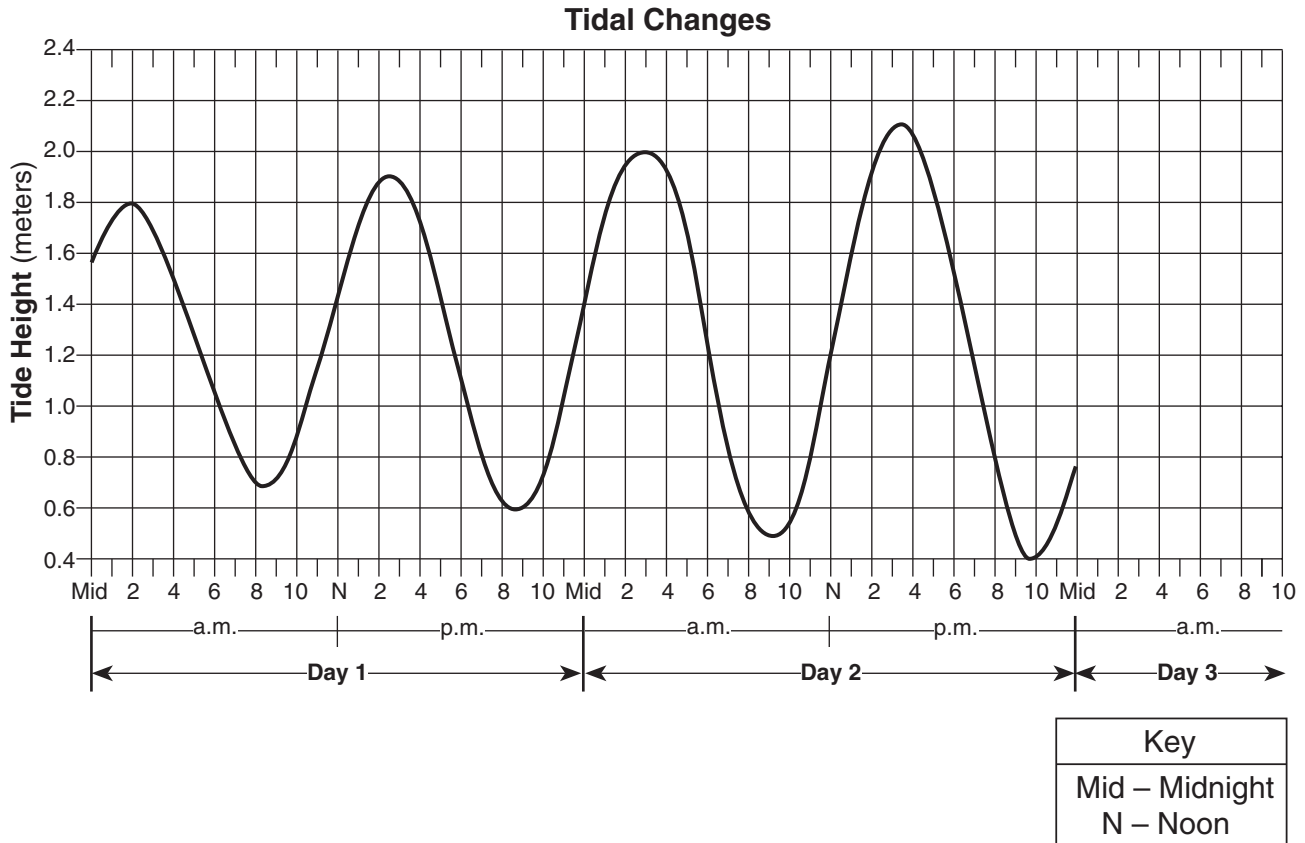
In which orbital position would Earth be illuminated as shown?

- |       |       |
|-------|-------|
| (1) A | (3) C |
| (2) B | (4) D |

41 How many degrees will the Sun's vertical rays shift on Earth's surface as Earth travels from position *C* to position *D*?

- (1) 15° (3) 47°  
 (2) 23.5° (4) 365°

Base your answers to questions 42 and 43 on the graph below, which shows two days of tidal data from a coastal location in the northeastern United States.



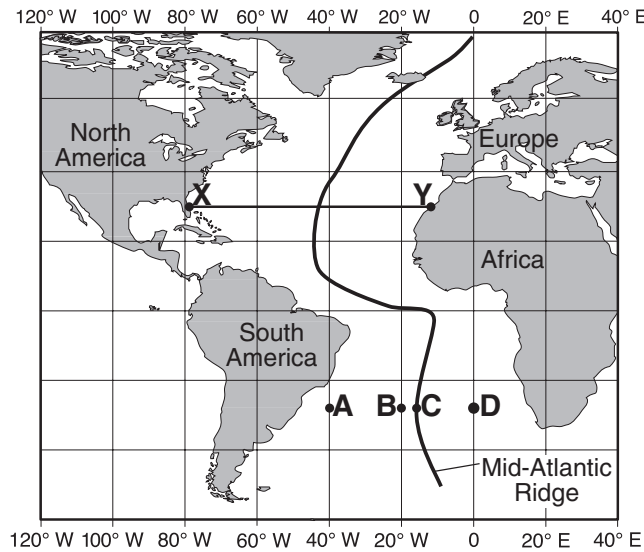
42 The change in the tides as shown on the graph is primarily the result of

- (1) Earth's rotation and the Moon's revolution  
 (2) Earth's rotation and revolution  
 (3) the Moon's rotation and Earth's revolution  
 (4) the Moon's rotation and revolution

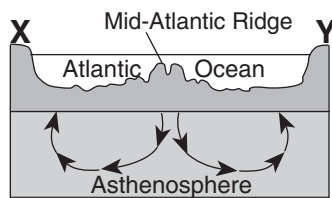
43 If the pattern shown continues, the most likely height and time for the first high tide on day 3 would be

- (1) 2.2 meters at 4 a.m. (3) 2.2 meters at 5 a.m.  
 (2) 2.3 meters at 4 a.m. (4) 2.3 meters at 5 a.m.

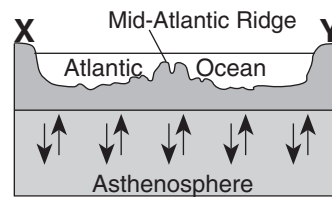
Base your answers to questions 44 through 46 on the map of the Mid-Atlantic Ridge shown below. Points A through D are locations on the ocean floor. Line XY connects locations in North America and Africa.



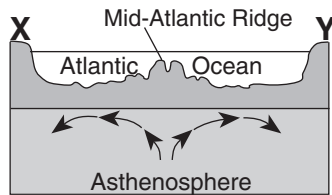
44 In which cross section do the arrows best show the convection occurring within the asthenosphere beneath line XY?



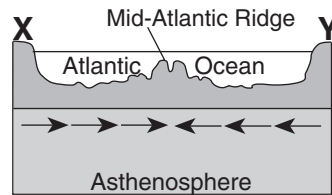
(1)



(3)



(2)



(4)

45 Samples of ocean-floor bedrock were collected at points A, B, C, and D. Which sequence shows the correct order of the age of the bedrock from oldest to youngest?

- (1) D → C → B → A
- (2) A → D → B → C

- (3) C → B → D → A
- (4) A → B → D → C

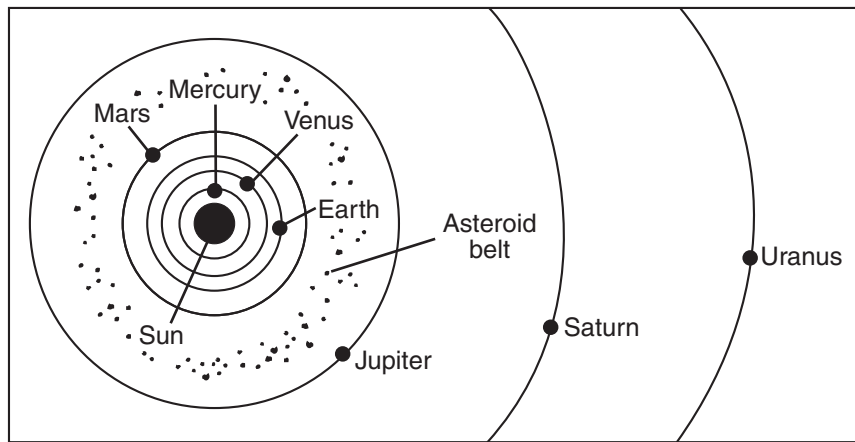
46 The boundary between which two tectonic plates is most similar geologically to the plate boundary at the Mid-Atlantic Ridge?

- (1) Eurasian and Indian-Australian
- (2) Cocos and Caribbean

- (3) Pacific and Nazca
- (4) Nazca and South American



Base your answer to question 50 on the diagram below. This diagram shows a portion of the solar system.



(Not drawn to scale)

50 What is the average distance, in millions of kilometers, from the Sun to the asteroid belt?

- |         |         |
|---------|---------|
| (1) 129 | (3) 503 |
| (2) 189 | (4) 857 |
-



**Part B–2**

**Answer all questions in this part.**

*Directions (51–65):* Record your answers in the spaces provided in your answer booklet. Some questions may require the use of the *Earth Science Reference Tables*.

Base your answers to questions 51 and 52 on the diagram in your answer booklet, which represents the sky above an observer in Elmira, New York. Angular distances above the horizon are indicated. The Sun's apparent path for December 21 is shown.

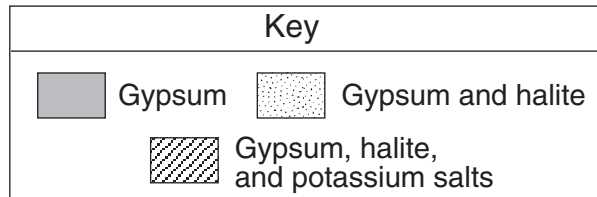
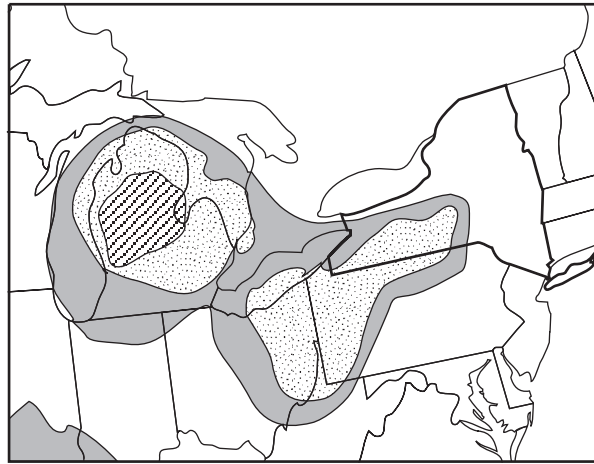
- 51 On March 21, the altitude of the noon Sun in Elmira is  $48^\circ$ . On the diagram *in your answer booklet*, draw the Sun's apparent path for March 21, as it would appear to the observer. Be sure your path begins and ends at the correct positions on the horizon and indicates the correct altitude of the noon Sun. [1]
- 52 On what date of the year does the maximum duration of insolation usually occur at Elmira? [1]
- 

Base your answers to questions 53 through 57 on the weather map in your answer booklet, which shows two fronts associated with a low-pressure system.

- 53 On the weather map *in your answer booklet*, write the letter **L** at the location of the center of the low-pressure system. [1]
- 54 On the weather map *in your answer booklet*, write the air-mass symbols to indicate the most likely locations of the continental polar air mass and maritime tropical air mass that have formed this low-pressure system. [1]
- 55 On the weather map *in your answer booklet*, place an **X** where precipitation is most likely occurring. [1]
- 56 Which type of weather front has entered New York State? [1]
- 57 Warm, moist air is rising along the two frontal surfaces. Describe how the water vapor in this rising air forms clouds. Include *dewpoint* and *condensation* in your answer. [1]
-

Base your answers to questions 58 and 59 on the map below. The map shows the approximate area in a portion of North America where some sedimentary rock layers composed of gypsum, halite, and potassium salt minerals are found in Earth's crust.

### Mineral Deposits

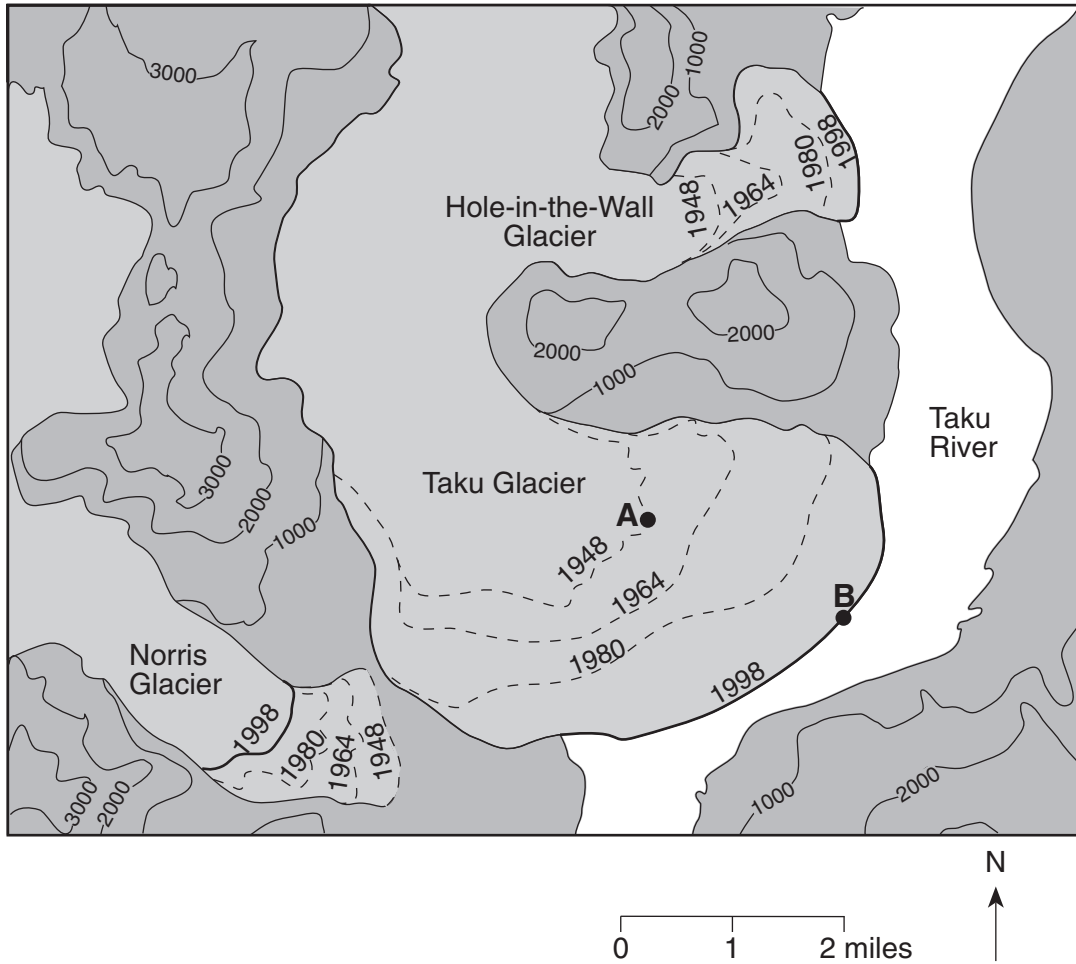


58 Identify *one* New York State landscape region in which deposits of gypsum and halite are commonly found. [1]

59 Identify the sedimentary rock composed of halite and explain how this rock is usually formed. [1]

---

Base your answers to questions 60 through 62 on the topographic map below, which shows three glaciers found in Alaska. Dashed lines show the inferred location of the front edge of each glacier in 1948, 1964, and 1980. Solid lines show the location of the front edge of each glacier in 1998. Points A and B show the location of the front edge of the Taku Glacier in 1948 and 1998. Elevations are in feet.



60 Determine the rate, in miles per year, that the front edge of the Taku Glacier moved between point A and point B. [1]

61 What is the contour interval on this map? [1]

62 If these glaciers completely melted, what *two* pieces of evidence would a scientist most likely find to indicate that glaciers had existed in this area? [1]

Base your answers to questions 63 through 65 on the data table below, which shows the average distance from the Sun, the average surface temperature, and the average orbital velocity for each planet in our solar system.

**Data Table**

<b>Planet</b>	<b>Average Distance from Sun</b> (millions of km)	<b>Average Surface Temperature</b> (°C)	<b>Average Orbital Velocity</b> (km/sec)
Mercury	58	167	47.9
Venus	108	457	35.0
Earth	150	14	29.8
Mars	228	-55	24.1
Jupiter	778	-153	13.1
Saturn	1427	-185	9.7
Uranus	2869	-214	6.8
Neptune	4496	-225	5.4

- 63 State the relationship between the average distance from the Sun and the average surface temperature of the Jovian planets. [1]
- 64 Venus has an atmosphere composed mostly of carbon dioxide. Mercury has almost no atmosphere. Explain how the presence of the carbon dioxide in Venus' atmosphere causes the average surface temperature on Venus to be higher than the average surface temperature on Mercury. [1]
- 65 On the graph *in your answer booklet*, draw a line to indicate the general relationship between a planet's average distance from the Sun and its average orbital velocity. [1]
-

## Part C

### Answer all questions in this part.

*Directions* (66–84): Record your answers in the spaces provided in your answer booklet. Some questions may require the use of the *Earth Science Reference Tables*.

Base your answers to questions 66 through 70 on the passage below and on the map in your answer booklet. The passage describes the New Madrid fault system. The numbers on the map show the predicted relative damage at various locations if a large earthquake occurs along the New Madrid fault system. The higher the number, the greater the relative damage.

### The New Madrid Fault System







The greatest earthquake risk area east of the Rocky Mountains is along the New Madrid fault system. The New Madrid fault system consists of a series of faults along a weak zone in the continental crust in the midwestern United States. Earthquakes occur in the Midwest less often than in California, but when they do happen, the damage is spread over a wider area due to the underlying bedrock.

In 1811 and 1812, the New Madrid fault system experienced three major earthquakes. Large land areas sank, new lakes formed, the course of the Mississippi River changed, and 150,000 acres of forests were destroyed.


- 66 On the map *in your answer booklet*, draw the 4, 6, and 8 isolines indicating relative damage. [1]
- 67 Using the predicted damage numbers, place an **X** on the map to indicate where the New Madrid fault system most likely exists. [1]
- 68 The distance between the New Madrid fault system and Albany, New York, is 1800 kilometers. What was the time difference between the arrival of the first *P*-wave and the arrival of the first *S*-wave at Albany when the 1812 earthquake occurred? [1]
- 69 State *one* reason why earthquakes occur more frequently on the western coast of the United States than in the New Madrid region. [1]
- 70 An emergency management specialist near the New Madrid region is developing a plan that would help save lives and prevent property damage in the event of an earthquake. Describe *two* actions that should be included in the plan. [1]
-

Base your answers to questions 71 through 74 on the data table below and on the graph in your answer booklet. The data table shows the maximum altitude and phase of the Moon observed above the southern horizon on certain dates during January and February at a New York State location. The line on the graph in your answer booklet shows the altitude of the noontime Sun observed during the same time period at the same New York State location.

**Data Table**

Date	Maximum Altitude of Moon (°)	Phase of Moon
January 4	26	new 
January 13	63	first quarter 
January 19	72	full 
January 26	35	last quarter 
February 3	34	new 
February 11	70	first quarter 
February 18	60	full 
February 25	27	last quarter 

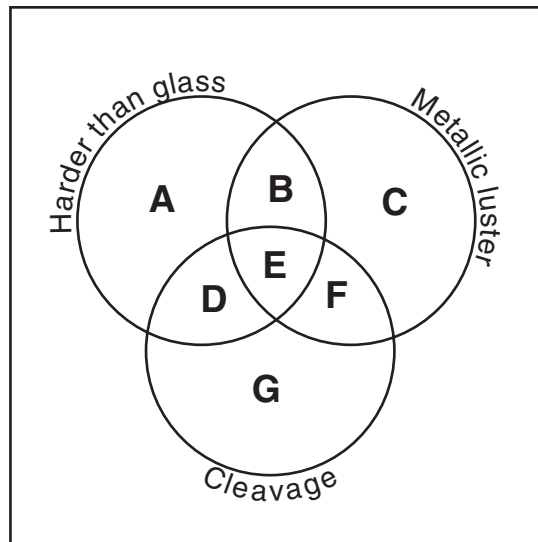
- 71 On the grid *in your answer booklet*, plot with an **X** the maximum altitude of the Moon for each date shown on the data table. [1]
- 72 The multiple-exposure photograph below, taken on February 3, shows a total solar eclipse in the middle of the photograph. The maximum altitude of the Sun on this date was  $34^\circ$  above the southern horizon at this New York State location.



Based on the data table, explain why this total solar eclipse occurred on February 3. [1]

- 73 The diagram *in your answer booklet* shows the Moon's orbit around Earth. Place an **X** on the orbit to represent the Moon's position on February 18. [1]
- 74 Assuming that February had 28 days, on which date in March did the next full Moon occur? [1]
- 

Base your answers to questions 75 and 76 on the diagram below of a mineral classification scheme that shows the properties of certain minerals. Letters A through G represent mineral property zones. Zone E represents the presence of all three properties. For example, a mineral that is harder than glass, has a metallic luster, but does not have cleavage, would be placed in zone B. Assume that glass has a hardness of 5.5.



- 75 In which zone would the mineral potassium feldspar be placed? [1]
- 76 State the name of *one* mineral listed on the *Properties of Common Minerals Table* that could *not* be placed in any of the zones. [1]
-

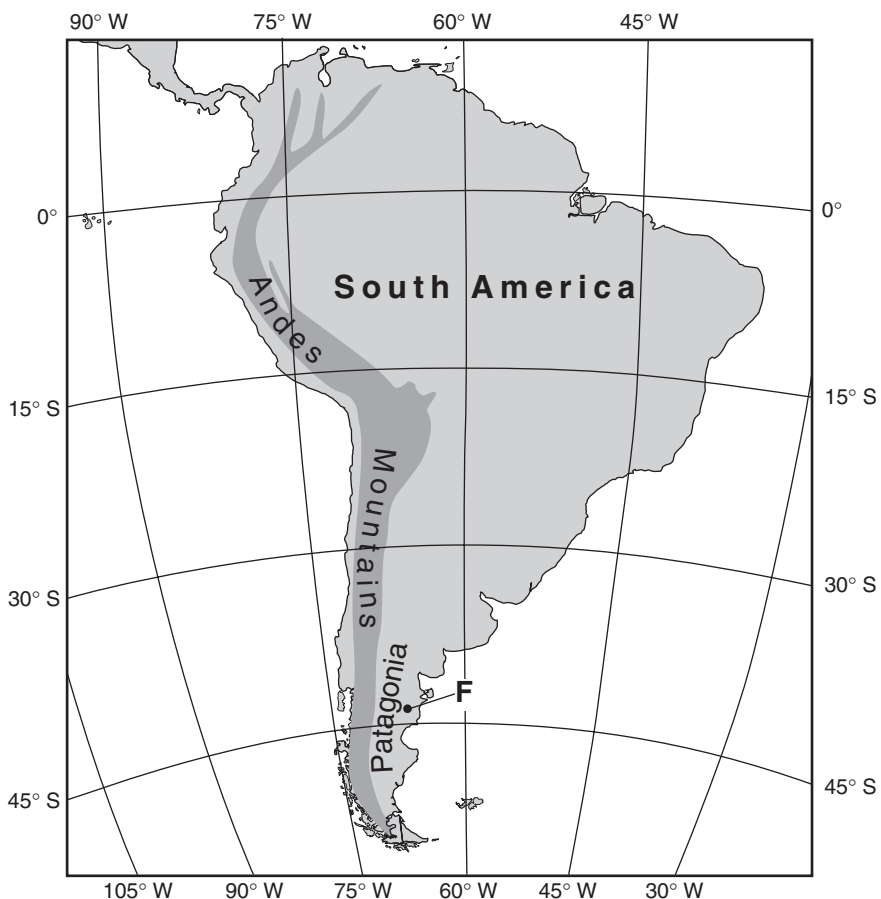
Base your answers to questions 77 through 81 on the passage and map below. Point *F* on the map shows the location where an unusual mammal fossil was found.

### Fossil Jaw of Mammal Found in South America

Paleontologists working in Patagonia have found the tiny fossil jaw that may be the first evidence of early mammals in South America.

The fossil, which measures less than a quarter-inch long, is believed to be from the middle or late Jurassic Period. Researchers said it suggests that mammals developed independently in the Southern Hemisphere.

The fossil, named *Asfaltomylos patagonicus*, was discovered in a shale formation in Patagonia. Dinosaurs were the dominant land animal at that time. Mammals were tiny, and hunted insects in the dense tropical vegetation. The now-arid region also has yielded some remarkable dinosaur fossils from the same period in a vast ancient boneyard covering hundreds of square miles.



77 State the latitude and longitude of point *F*, to the *nearest degree*, where the fossil *Asfaltomylos patagonicus* was discovered. Include the correct units and compass directions in your answer. [1]

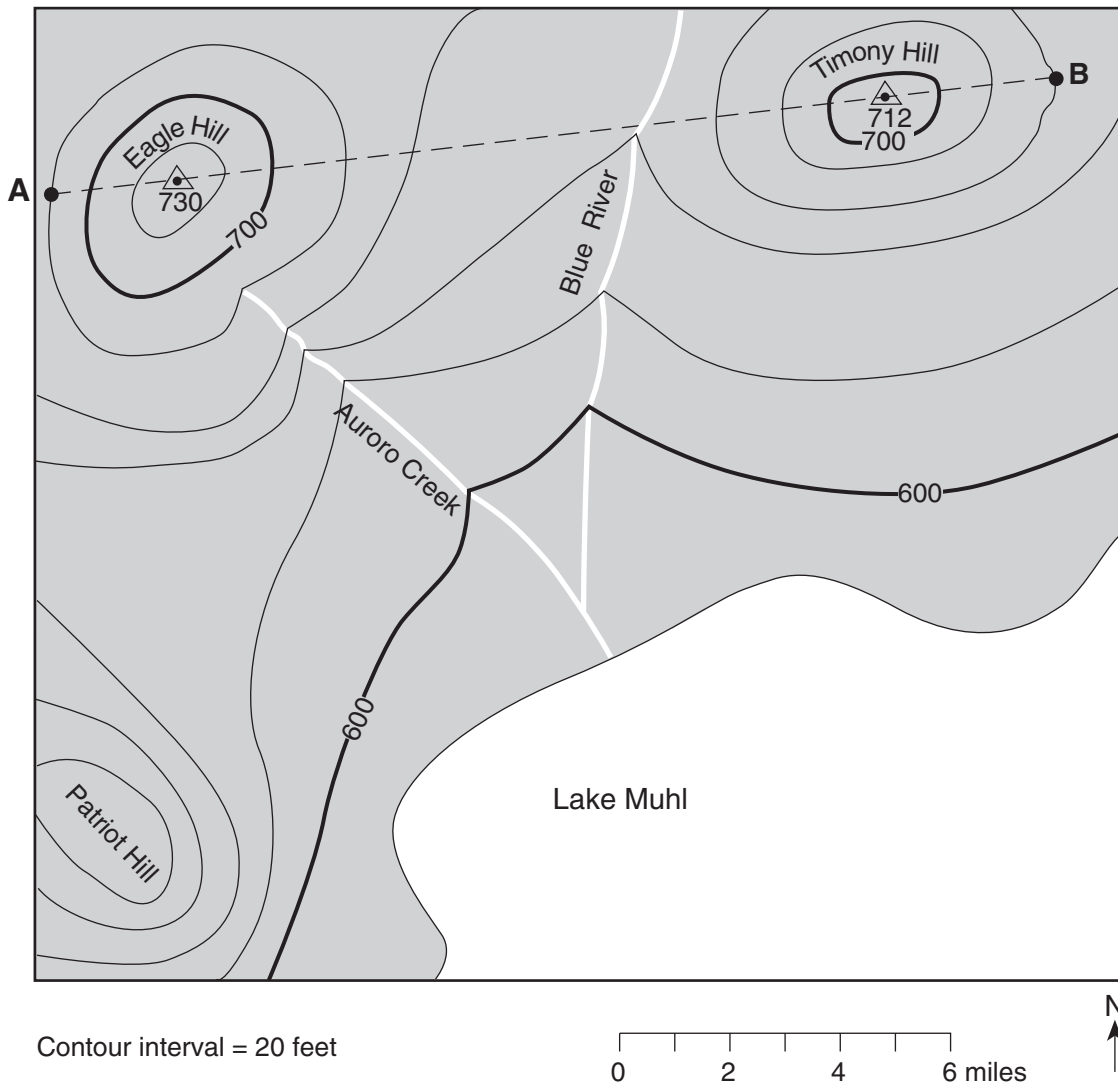
78 State the name of the dominant sediment particle that was compacted to form the shale in which this fossil was found. [1]



- 79 What other life-form first appeared on Earth during the geologic period when *Asfaltomylos patagonicus* existed? [1]
- 80 State *one* method used by geologists to determine the age of the bedrock in which this ancient mammal fossil was found. [1]
- 81 Explain how the uplift of the Andes Mountains changed eastern Patagonia's climate from a wet tropical forest at the time *Asfaltomylos patagonicus* lived to the arid conditions of today. [1]
-

Base your answers to questions 82 through 84 on the topographic map below. Points *A* and *B* are reference points on the map. The  $\triangle$  symbols show the highest elevations on Eagle Hill and Timony Hill. Elevations are shown in feet.

### Topographic Map



82 Identify the general compass direction toward which Auroro Creek is flowing. [1]

83 State a possible elevation of the top of Patriot Hill. [1]

84 On the grid in your answer booklet, construct a topographic profile along line *AB* by plotting an **X** for the elevation of each contour line that crosses line *AB*. Connect the plotted **X**s with a smooth, curved line to complete the profile. Points *A* and *B* have been plotted. [2]

Tear Here

The University of the State of New York

REGENTS HIGH SCHOOL EXAMINATION

PHYSICAL SETTING  
EARTH SCIENCE

Wednesday, January 28, 2009 — 9:15 a.m. to 12:15 p.m., only

ANSWER SHEET

Student ..... Sex:  Male  Female Grade .....

Teacher ..... School .....

Record your answers to Part A and Part B-1 on this answer sheet.

Part A

- 1 ..... 13 ..... 25 .....
- 2 ..... 14 ..... 26 .....
- 3 ..... 15 ..... 27 .....
- 4 ..... 16 ..... 28 .....
- 5 ..... 17 ..... 29 .....
- 6 ..... 18 ..... 30 .....
- 7 ..... 19 ..... 31 .....
- 8 ..... 20 ..... 32 .....
- 9 ..... 21 ..... 33 .....
- 10 ..... 22 ..... 34 .....
- 11 ..... 23 ..... 35 .....
- 12 ..... 24 .....

Part A Score

Part B-1

- 36 ..... 44 .....
- 37 ..... 45 .....
- 38 ..... 46 .....
- 39 ..... 47 .....
- 40 ..... 48 .....
- 41 ..... 49 .....
- 42 ..... 50 .....
- 43 .....

Part B-1 Score

Write your answers to Part B-2 and Part C in your answer booklet.

The declaration below must be signed when you have completed the examination.

I do hereby affirm, at the close of this examination, that I had no unlawful knowledge of the questions or answers prior to the examination and that I have neither given nor received assistance in answering any of the questions during the examination.

Signature

Tear Here

Tear Here

Tear Here